


Nombrees

Date

Prénom



Exercice n° 1

Ecris ces fractions en lettres.

- a) $\frac{1}{5}$ b) $\frac{7}{2}$ c) $\frac{4}{6}$ d) $\frac{3}{4}$ e) $\frac{6}{8}$ f) $\frac{9}{3}$ g) $\frac{5}{12}$ h) $\frac{8}{7}$ i) $\frac{20}{100}$

_____ a _____

_____ b _____

_____ c _____

_____ d _____

_____ e _____

_____ f _____

_____ g _____

_____ h _____

_____ i _____

Exercice n° 2

Ecris les fractions représentées par les parties coloriées.

A B C D E

- A B C D E



Ecris la fraction B en lettres!

Exercice n° 3

Colorie pour obtenir la fraction demandée.

$\frac{2}{3}$ $\frac{3}{5}$ $\frac{6}{10}$ $\frac{4}{9}$ $\frac{7}{8}$

Nombres

Date

Prénom



Exercice n° 1

Ecris les fractions dictées par le maître.

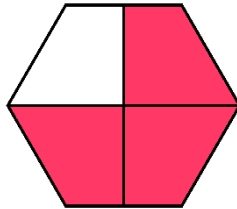
10 empty boxes for writing fractions.

Exercice n° 2


Est-il possible d'écrire la partie coloriée sous forme d'une fraction ?



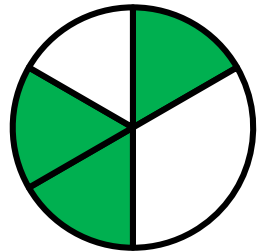
OUI NON



OUI NON



OUI NON



OUI NON

Exercice n° 3

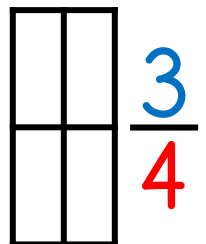
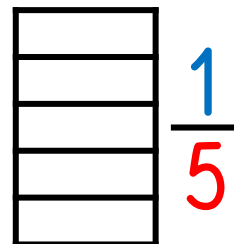
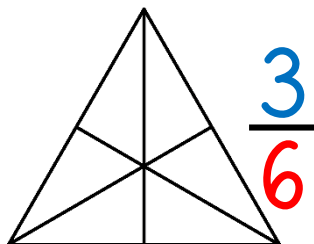
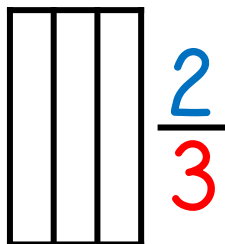
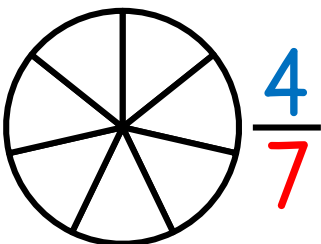
Ecris en chiffres.

- a) un demi
- b) six quarts
- c) cinq tiers
- d) dix cinquièmes
- e) sept neuvièmes
- f) trois septièmes
- g) un dixième
- h) huit douzièmes
- i) deux huitièmes
- j) neuf centièmes
- k) quatre sixièmes
- l) vingt trentièmes

12 empty boxes labeled a through l for writing the corresponding numbers.

Exercice n° 4


Colorie pour obtenir la fraction demandée.



Nombre

Date

Prénom



Exercice n° 1

Ecris en lettres.

- a) $\frac{3}{4}$ b) $\frac{5}{9}$ c) $\frac{6}{7}$ d) $\frac{9}{2}$ e) $\frac{4}{5}$ f) $\frac{7}{8}$ g) $\frac{2}{10}$ h) $\frac{1}{3}$ i) $\frac{15}{100}$

_____ a _____

_____ b _____

_____ c _____

_____ d _____

_____ e _____

_____ f _____

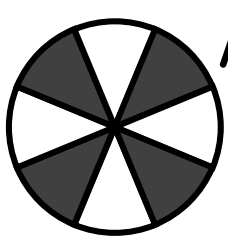
_____ g _____

_____ h _____

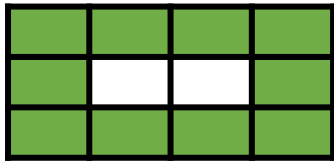
_____ i _____

Exercice n° 2

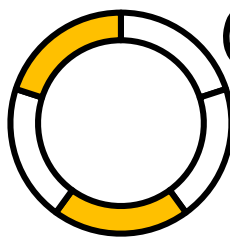
Ecris les fractions représentées par les parties coloriées.



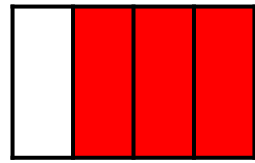
A



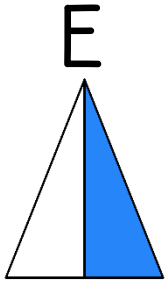
B



C




D



E

A B C D E

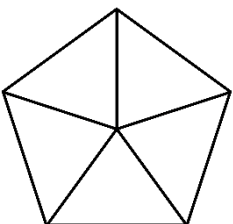
Ecris la fraction C en lettres!




_____ C _____

Exercice n° 3


Colorie pour obtenir la fraction demandée.



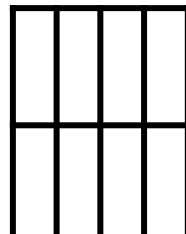
$\frac{3}{5}$



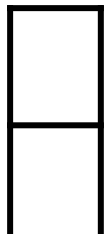
$\frac{2}{3}$



$\frac{1}{4}$



$\frac{6}{8}$




$\frac{2}{2}$

Nombre

Date

Prénom



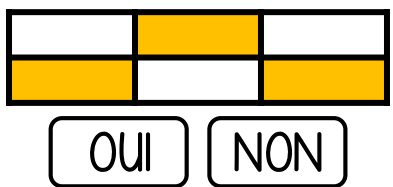
Exercice n° 1

Ecris les fractions dictées par le maître.

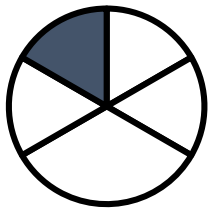
10 empty boxes for writing fractions.

Exercice n° 2


Est-il possible d'écrire la partie coloriée sous forme d'une fraction ?



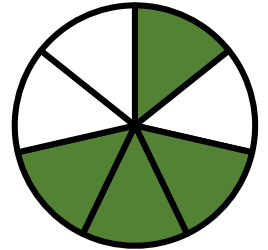
OUI NON



OUI NON



OUI NON



OUI NON

Exercice n° 3


Ecris en chiffres.

- a) un tiers
- b) deux quarts
- c) trois demis
- d) cinq huitièmes
- e) neuf sixièmes
- f) dix douzièmes
- g) quatre cinquièmes
- h) dix-sept tiers
- i) quinze vingtièmes
- j) deux demis
- k) huit quarts
- l) un centième

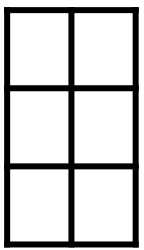
12 boxes labeled a through l for writing the corresponding numbers.

Exercice n° 4

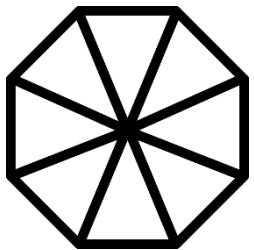
Colorie pour obtenir la fraction demandée.




$\frac{3}{4}$



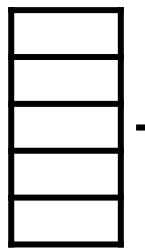
$\frac{5}{6}$



$\frac{4}{8}$



$\frac{7}{10}$




$\frac{2}{5}$

Nombres

Date

Prénom



Exercice n° 1

Ecris en lettres.

- a) $\frac{4}{5}$ b) $\frac{7}{3}$ c) $\frac{2}{6}$ d) $\frac{9}{9}$ e) $\frac{1}{4}$ f) $\frac{3}{7}$ g) $\frac{12}{15}$ h) $\frac{8}{2}$ i) $\frac{50}{100}$

_____ a _____

_____ b _____

_____ c _____

_____ d _____

_____ e _____

_____ f _____

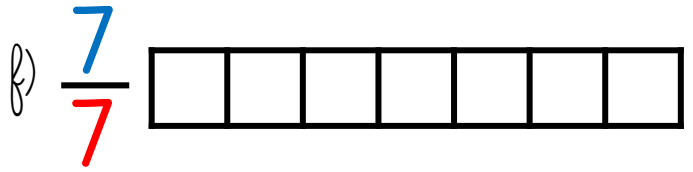
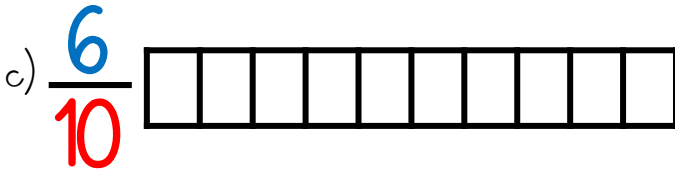
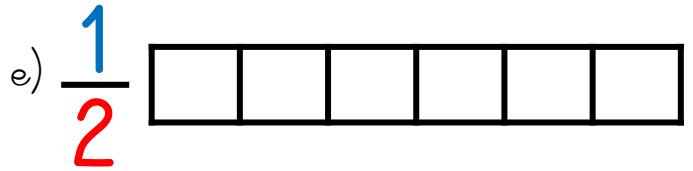
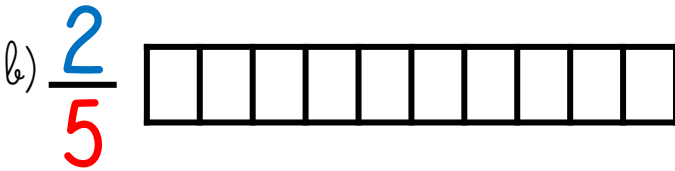
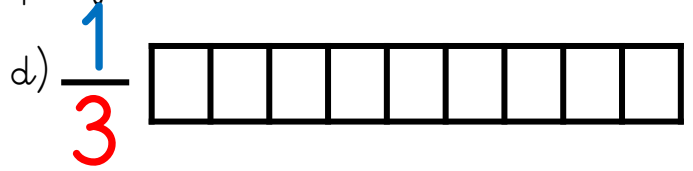
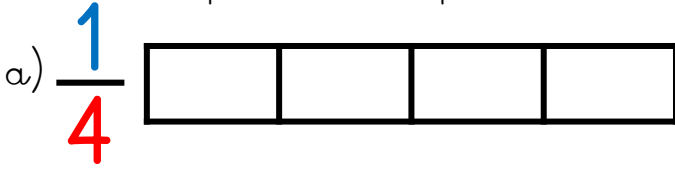
_____ g _____

_____ h _____

_____ i _____

Exercice n° 2

Colorie la partie correspondant à chaque fraction.



Exercice n° 3

Ecris les fractions dictées par le maître.