


Je fais le point

Nom _____ Prénom _____ Date ____/____/____

<http://laclasselleve.fr/>

Les fractions Lire et écrire



Exercice n° 1

Ecris les fractions dictées par le maître.

a	b	c	d	e	f	g	h	i	j	k	l
---	---	---	---	---	---	---	---	---	---	---	---

Évaluation

Ecrire des fractions sous la dictée.

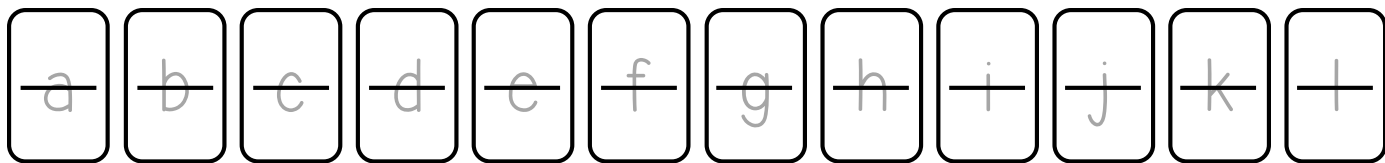



 / 12

Exercice n° 2

Ecris en chiffres.

- | | | | |
|----------------|--------------------|---------------------|------------------|
| a) un quart | d) six huitièmes | g) neuf septièmes | j) huit dixièmes |
| b) trois demis | e) quatre sixièmes | h) vingt centièmes | k) quinze tiers |
| c) sept tiers | f) sept douzièmes | i) trois cinquièmes | l) un neuvième |



Ecris en lettres.

- a) $\frac{2}{3}$ b) $\frac{4}{7}$ c) $\frac{1}{2}$ d) $\frac{9}{5}$ e) $\frac{3}{4}$ f) $\frac{8}{9}$ g) $\frac{10}{6}$ h) $\frac{7}{8}$ i) $\frac{40}{100}$



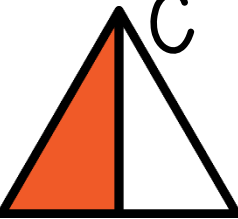



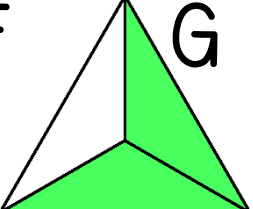

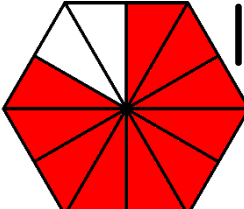
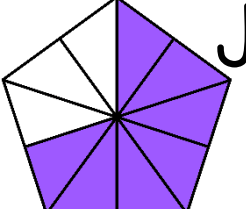
a	b	c
d	e	f
g	h	i

Évaluation

A+ Ecrire des fractions en chiffres et en lettres.    /21

Exercice n° 3

Ecris les fractions représentées par les parties coloriées.
Barre la figure impossible à traduire sous la forme d'une fraction !

 A	 B	 C	 D	 E					
 F	 G	 H	 I	 J					
<input type="text"/>	<input type="text"/>	<input type="text"/>	<input type="text"/>	<input type="text"/>	<input type="text"/>	<input type="text"/>	<input type="text"/>	<input type="text"/>	<input type="text"/>


Évaluation

A+ Ecrire la fraction représentée par une partie coloriée.    /10

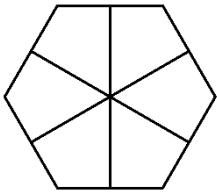


Exercice n° 4


Colorie pour obtenir la fraction demandée.



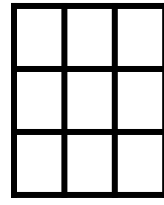
$\frac{1}{2}$




$\frac{2}{3}$



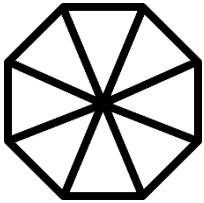
$\frac{4}{10}$



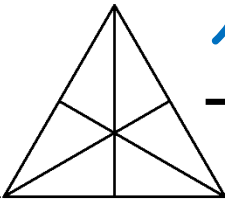
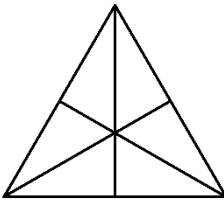
$\frac{7}{9}$



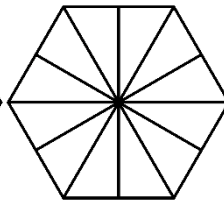
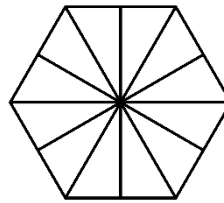
$\frac{3}{5}$



$\frac{5}{8}$




$\frac{12}{6}$



$\frac{19}{12}$

Évaluation



Colorier des parts pour obtenir la fraction demandée.



/8