

# Je fais le point

Nom  Prénom  Date

<https://laclasselleve.fr/>


# Les fractions

## Coder des mesures

### Exercice n° 1

Écris en chiffres les fractions que te montre le maître.

A	B	C	D	E	F	G	H	I	J	K	L
---	---	---	---	---	---	---	---	---	---	---	---





Écris en chiffres une fraction écrite en lettres.

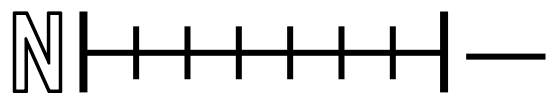
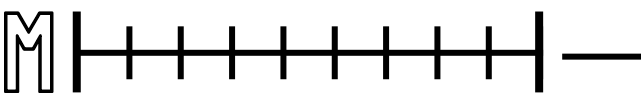
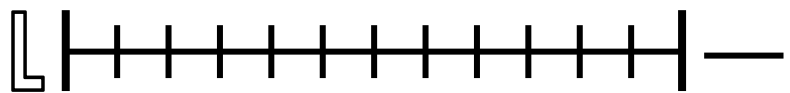
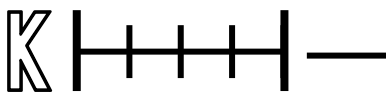
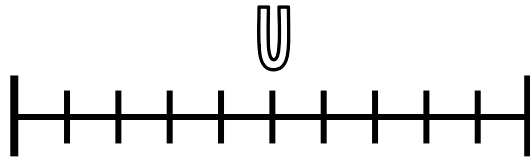
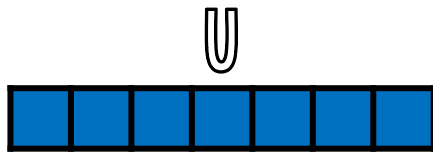



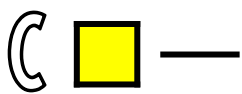
### Exercice n° 2

Écris les fractions correspondant à ces bandes.


U



Évaluation




Évaluation



Utiliser les fractions pour coder des mesures de longueurs.

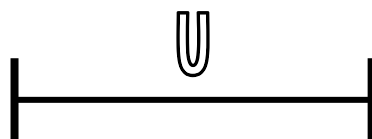


/ 14



Exercice n° 3

Trace les segments demandés.




Un segment  $[AB]$  qui mesure  $\frac{3}{5}$  de  $u$

Un segment [CD] qui mesure  $\frac{2}{5}$  de u

Un segment [EF] qui mesure  $\frac{7}{5}$  de u

Un segment [GH] qui mesure  $\frac{5}{5}$  de u

Un segment [IJ] qui mesure  $\frac{8}{5}$  de u



Tracer des longueurs à partir de fractions.



/ 10

Évaluation