


Meurea

CE2

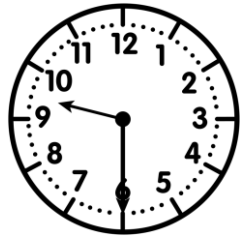
...../...../.....
PRÉNOM :




① Ecris l'heure sous chaque horloge.



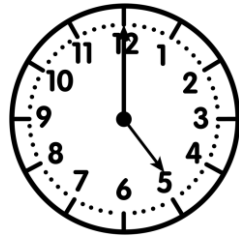
___ h ___



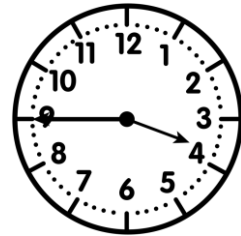
___ h ___



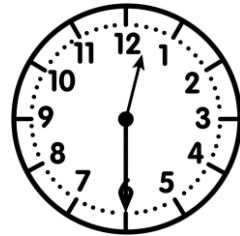
___ h ___



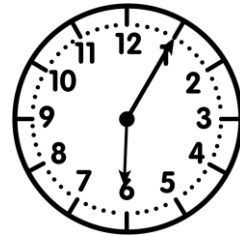
___ h ___



___ h ___



___ h ___

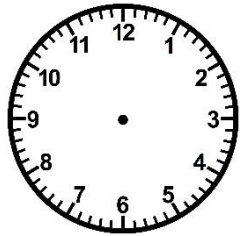



___ h ___

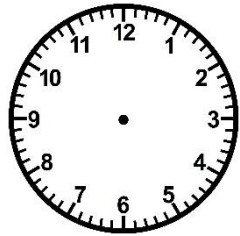


② Trace les aiguilles (rouge pour les heures, bleue pour les minutes).

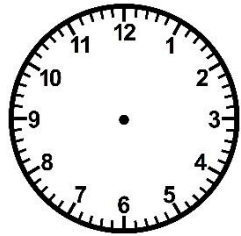
<https://laclassebleue.fr/>



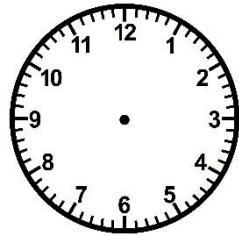
7 h 00



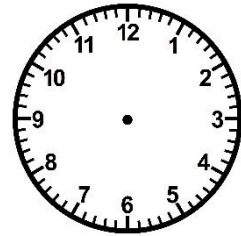
3 h 30



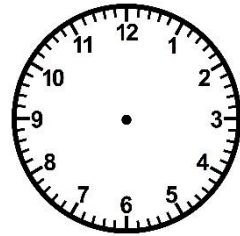
11 h 00



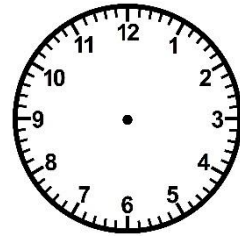
5 h 45



10 h 20




6 h 30



8 h 15

③ Résous ce problème.

Ce matin, Jonas est parti en randonnée avec ses parents à 14h20. Ils sont rentrés chez eux à 17h40. Combien de temps leur randonnée a-t-elle duré ?



Meurea/lire/l'heure


Meurea

CE2

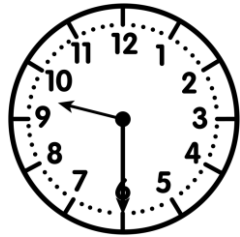
...../...../.....
PRÉNOM :




① Ecris l'heure sous chaque horloge.



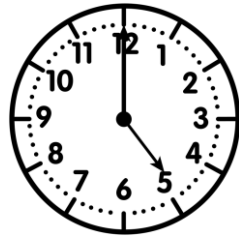
h h



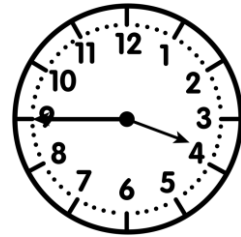
h h



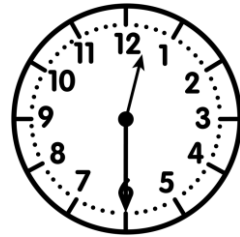
h h



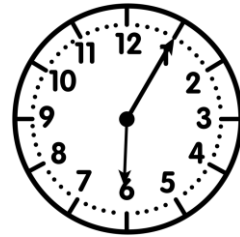
h h



h h



h h

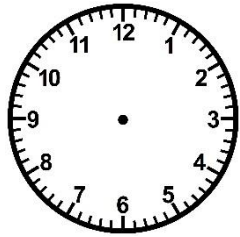



h h

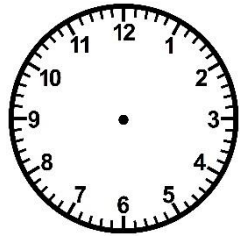


② Trace les aiguilles (rouge pour les heures, bleue pour les minutes).

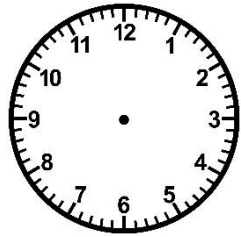
<https://laclassebleue.fr/>



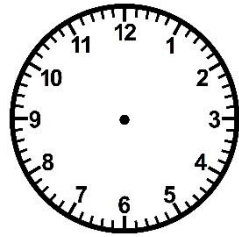
7 h 00



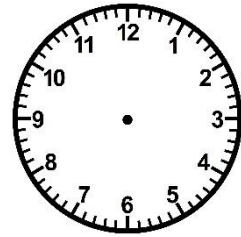
3 h 30



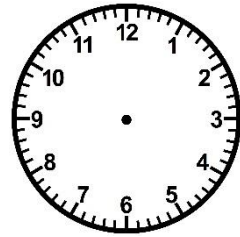
11 h 00



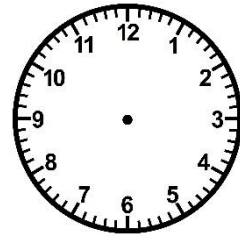
5 h 45



10 h 20




6 h 30



8 h 15

③ Résous ce problème.

Ce matin, Jonas est parti en randonnée avec ses parents à 14h20. Ils sont rentrés chez eux à 17h40. Combien de temps leur randonnée a-t-elle duré ?



Meurea/lire/l'heure


Meurea

CE2

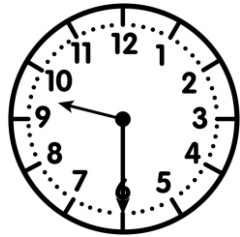
...../...../.....
PRÉNOM :




① Écris l'heure sous chaque horloge.



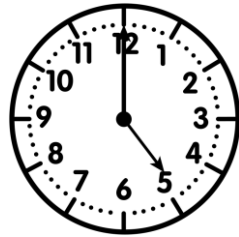
2h00 14h00



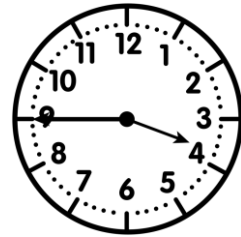
9h30 21h30



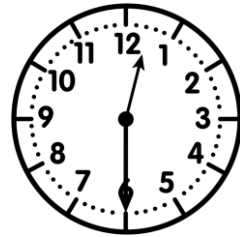
8h20 20h20



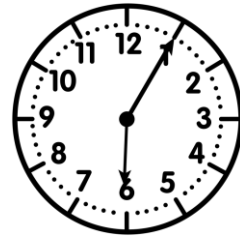
5h00 17h00



3h45 15h45



0h30 12h30

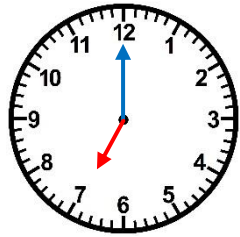


6h05 18h05

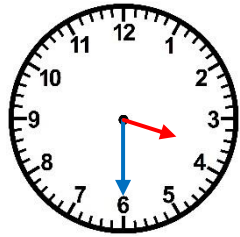


② Trace les aiguilles (rouge pour les heures, bleu pour les minutes).

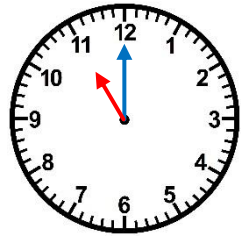
<https://laclassebleue.fr/>



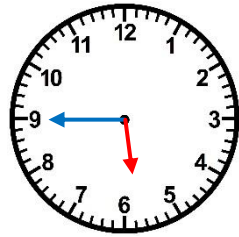
7 h 00



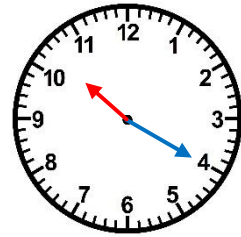
3 h 30



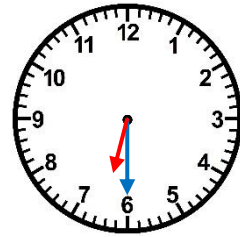
11 h 00



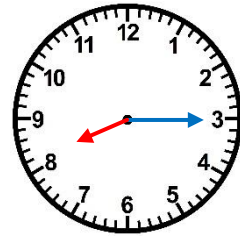
5 h 45



10 h 20




6 h 30



8 h 15

③ Résous ce problème.

Le matin, Jonas est parti en randonnée avec ses parents à 14h20. Ils sont rentrés chez eux à 17h40. Combien de temps leur randonnée a-t-elle duré ?



Meurea//l'heure

Meures

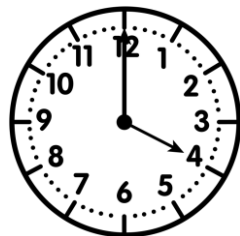
CE2



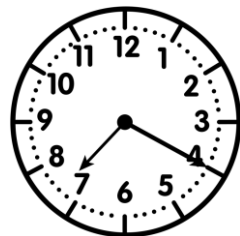
PRÉNOM :




① Ecris l'heure sous chaque horloge.




h



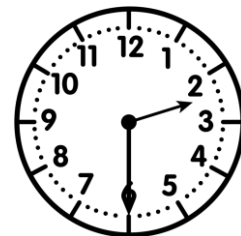
h




h




h



h



h

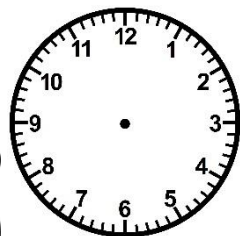


h

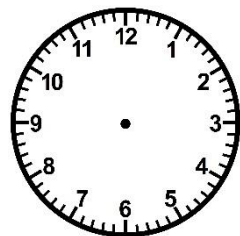


② Trace les aiguilles (rouge pour les heures, bleue pour les minutes).

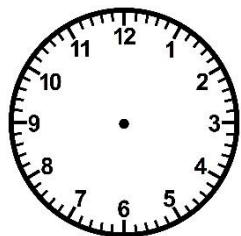
<https://laclassebleue.fr/>



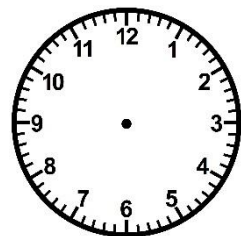
9 h 00



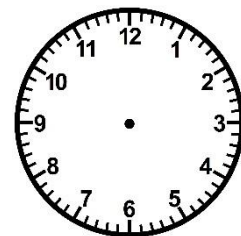
5 h 15



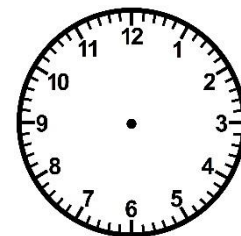
4 h 30



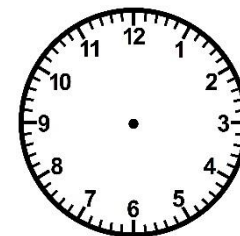
7 h 05



3 h 00



8 h 45



11 h 30



③ Résous ce problème.

Le cours de voile de Lisa a commencé à 9h30. Il dure 45 minutes. À quelle heure le cours se terminera-t-il ?



Meures/Lire l'heure


Meures

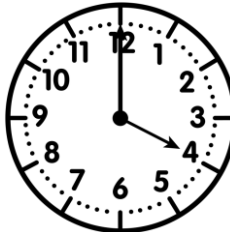
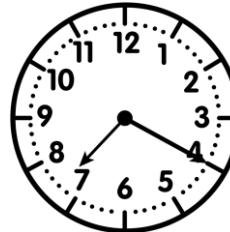



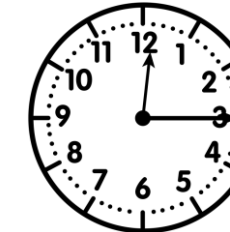
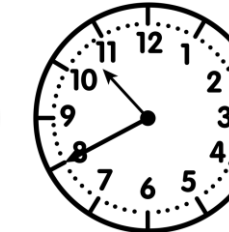
CE2

...../...../.....
PRÉNOM :




① Ecris l'heure sous chaque horloge.

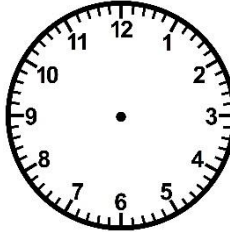
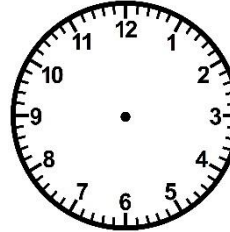

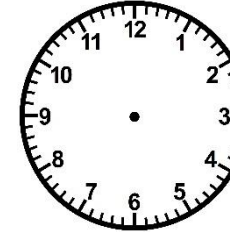

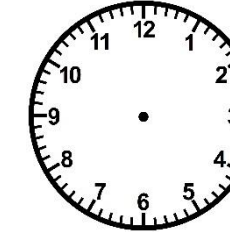
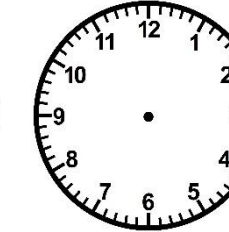


						
h h	h h	h h	h h	h h	h h	h h

② Trace les aiguilles (rouge pour les heures, bleue pour les minutes).

<https://laclassebleue.fr/>



						
9 h 00	5 h 15	4 h 30	7 h 05	3 h 00	8 h 45	11 h 30

③ Résous ce problème.

Le cours de voile de Lisa a commencé à 9h30. Il dure 45 minutes. À quelle heure le cours se terminera-t-il ?



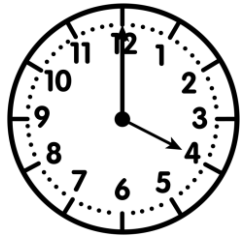
Measures

CE2

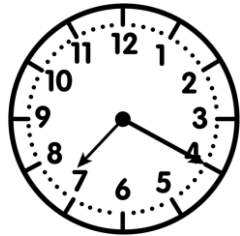
...../...../.....
PRÉNOM :




① Écris l'heure sous chaque horloge.



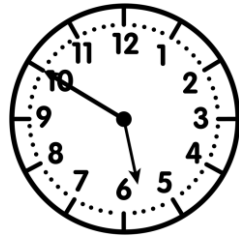
4h00 16h00



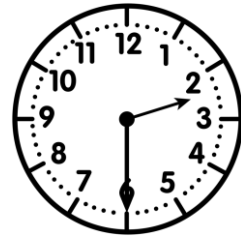
7h20 19h20



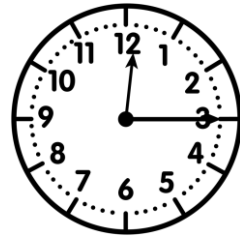
11h35 23h35



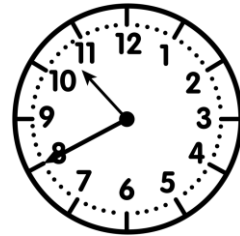
5h50 17h50



2h30 14h30



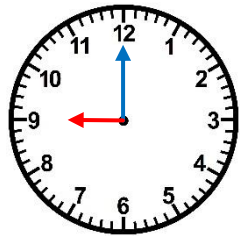
0h15 12h15



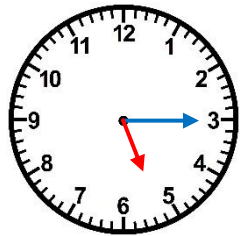
10h40 22h40

② Trace les aiguilles (rouge pour les heures, bleue pour les minutes).

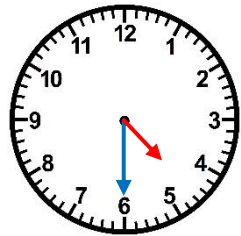
<https://laclassebleue.fr/>



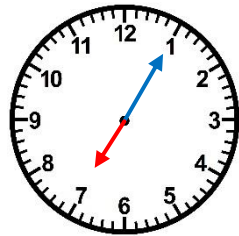
9 h 00



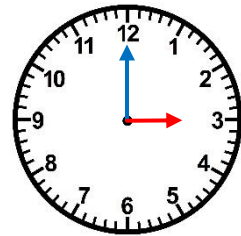
5 h 15



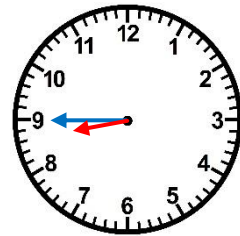
4 h 30



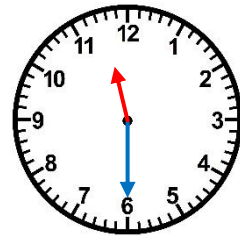
7 h 05



3 h 00



8 h 45



11 h 30

③ Résous ce problème.

Le cours de voile de Lisa a commencé à 9h30. Il dure 45 minutes. À quelle heure le cours se terminera-t-il ?



Measures / Lire l'heure

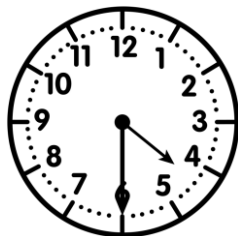
Measures

CE2


...../...../.....
PRÉNOM :



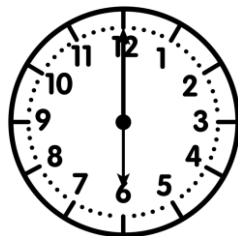
① Ecris l'heure sous chaque horloge.



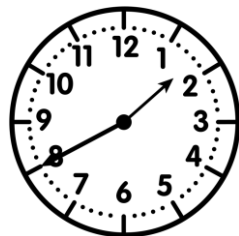
___ h ___



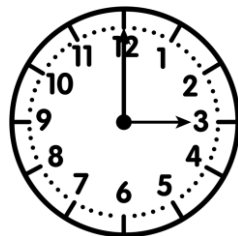
___ h ___



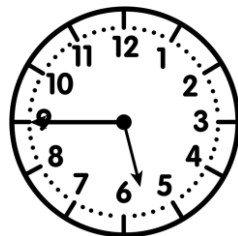
___ h ___




___ h ___



___ h ___



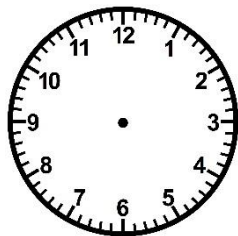
___ h ___



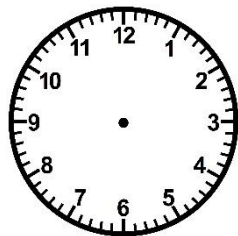
___ h ___

② Trace les aiguilles (rouge pour les heures, bleue pour les minutes).

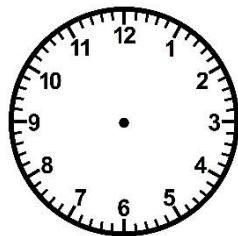
<https://laclassebleue.fr/>



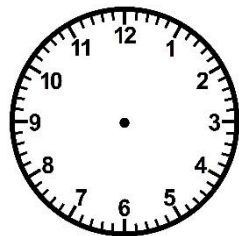
4 h 15



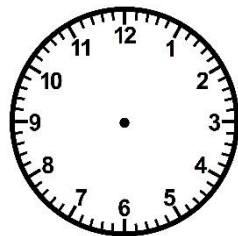
1 h 00



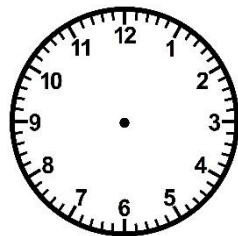
9 h 30



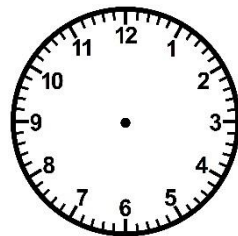
2 h 45



12 h 30



10 h 20



7 h 10

③ Résous ce problème.

Ce soir, Fabio et ses parents sont allés au cinéma. Le film a duré 1 h 35 et la séance s'est terminée à 22 h 45. À quelle heure la séance a-t-elle commencé ?



Measures / Lire l'heure

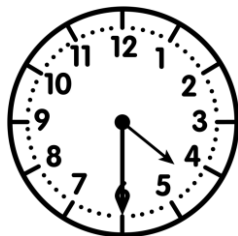
Measures

CE2


...../...../.....
PRÉNOM :



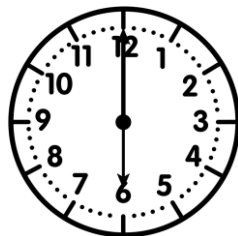
① Ecris l'heure sous chaque horloge.



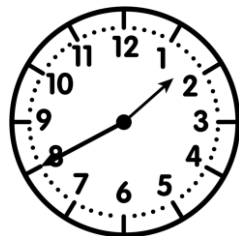
h h



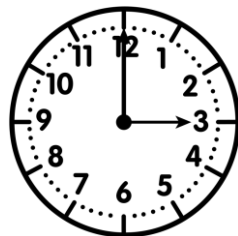
h h



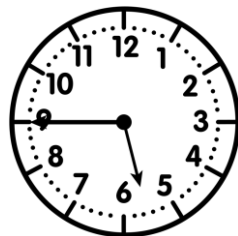
h h




h h



h h



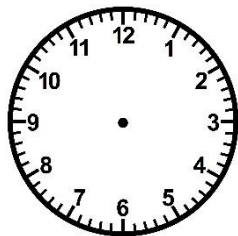
h h



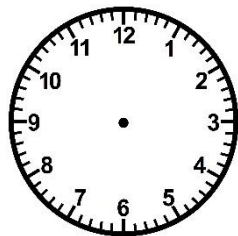
h h

② Trace les aiguilles (rouge pour les heures, bleue pour les minutes).

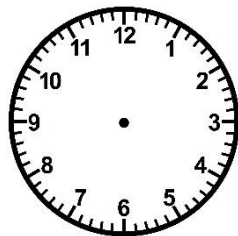
<https://laclassebleue.fr/>



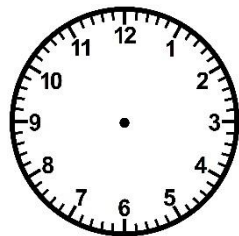
4 h 15



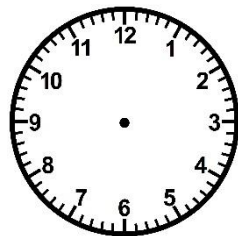
1 h 00



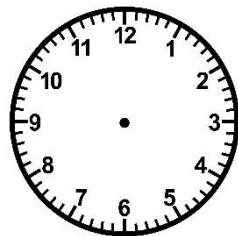
9 h 30



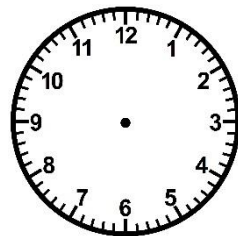
2 h 45



12 h 30



10 h 20



7 h 10

③ Résous ce problème.

Ce soir, Fabio et ses parents sont allés au cinéma. Le film a duré 1 h 35 et la séance s'est terminée à 22 h 45. À quelle heure la séance a-t-elle commencé ?



Measures / Lire l'heure

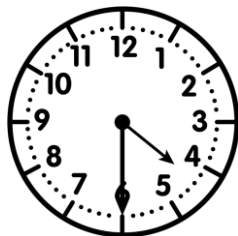
Measures

CE2


...../...../.....
PRÉNOM :



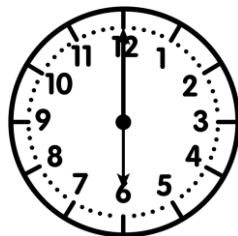
① Écris l'heure sous chaque horloge.



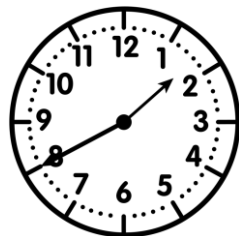
4h30 16h30



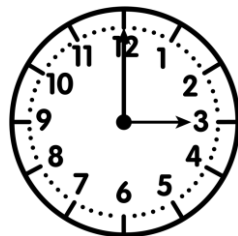
8h10 20h10



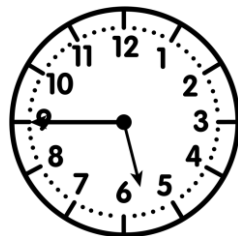
6h00 18h00




1h40 13h40



3h00 15h00



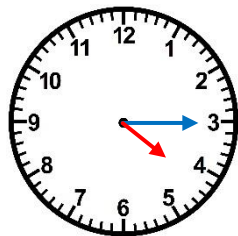
5h45 17h45



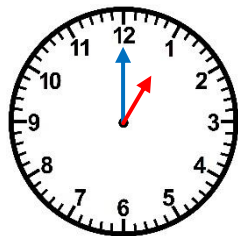
9h50 21h50

② Trace les aiguilles (rouge pour les heures, bleu pour les minutes).

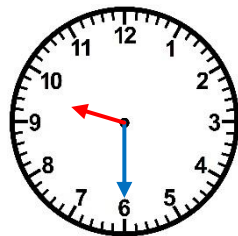
<https://laclassebleue.fr/>



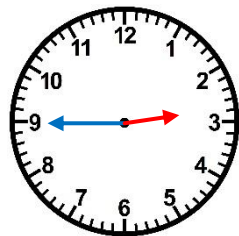
4 h 15



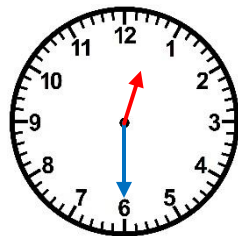
1 h 00



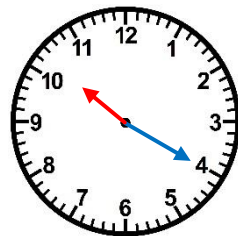
9 h 30



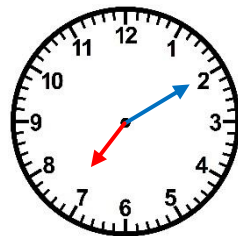
2 h 45



12 h 30



10 h 20



7 h 10

③ Résous ce problème.

Ce soir, Fabio et ses parents sont allés au cinéma. Le film a duré 1 h 35 et la séance s'est terminée à 22 h 45. À quelle heure la séance a-t-elle commencé ?




Measures

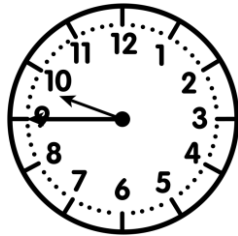

CE2

..... / /

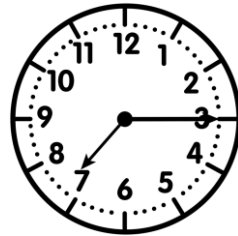
PRÉNOM :



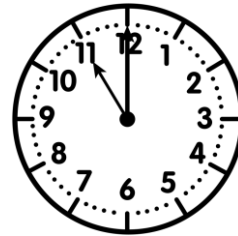
① Ecris l'heure sous chaque horloge.



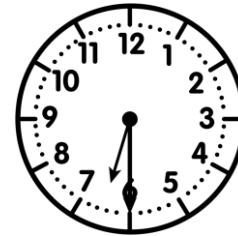
___ h ___



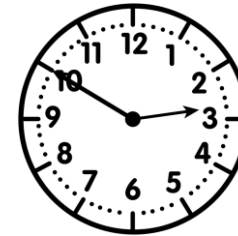
___ h ___




___ h ___




___ h ___



___ h ___



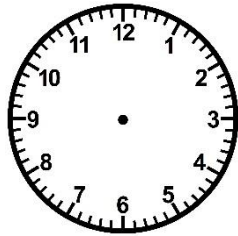
___ h ___



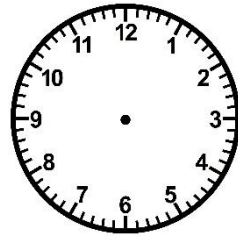
___ h ___

② Trace les aiguilles (rouge pour les heures, bleue pour les minutes).

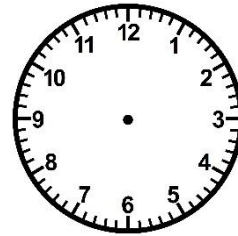
<https://laclassebleue.fr/>



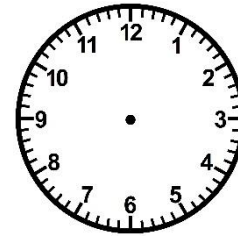
3 h 00



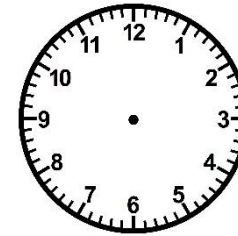
8 h 30



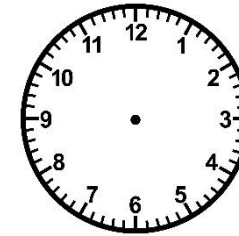
2 h 20




5 h 00



4 h 45



11 h 15



9 h 35

③ Résous ce problème.

Marie a préparé une tarte aux pommes qu'elle a mise au four à 11h15. Le temps de cuisson est de 30 min. À quelle heure la tarte sera-t-elle cuite ?




Measures / Lire l'heure

Measures

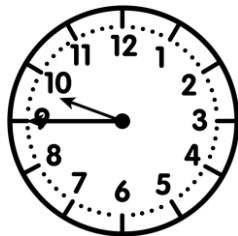

CE2

..... / /

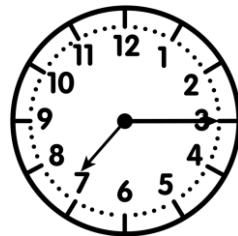
PRÉNOM :



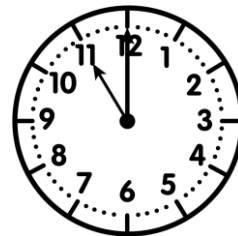
① Ecris l'heure sous chaque horloge.




h h



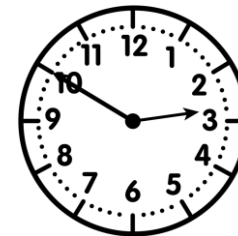
h h




h h




h h



h h



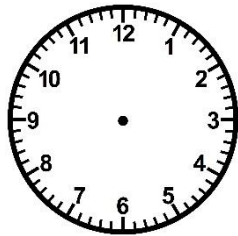
h h



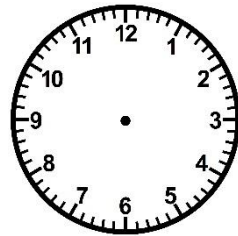
h h

② Trace les aiguilles (rouge pour les heures, bleue pour les minutes).

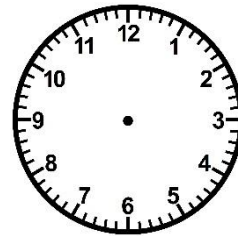
<https://laclassebleue.fr/>



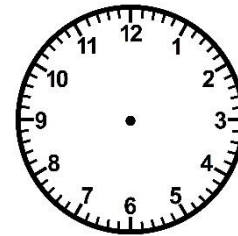
3 h 00



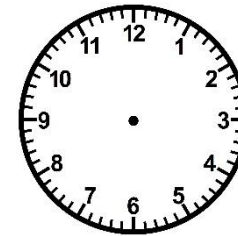
8 h 30




2 h 20




5 h 00



4 h 45




11 h 15



9 h 35

③ Résous ce problème.

Marie a préparé une tarte aux pommes qu'elle a mise au four à 11h15. Le temps de cuisson est de 30 min. À quelle heure la tarte sera-t-elle cuite ?




Measures / Lire l'heure

Measures

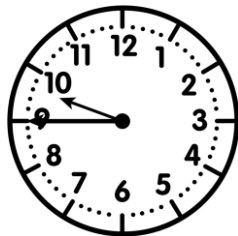

CE2

..... / /

PRÉNOM :

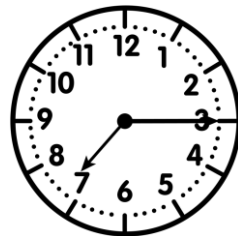


① Écris l'heure sous chaque horloge.



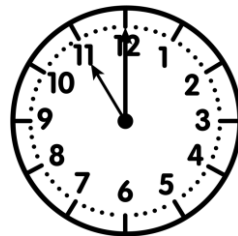
9h45

21h45




7h15

19h15




11h00

23h00




6h30

18h30




2h50

14h50



0h25

12h25

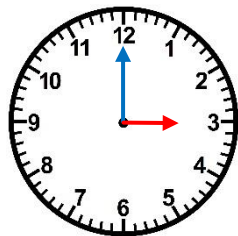


10h30

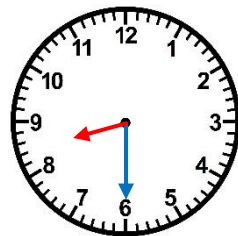
22h30

② Trace les aiguilles (rouge pour les heures, bleu pour les minutes).

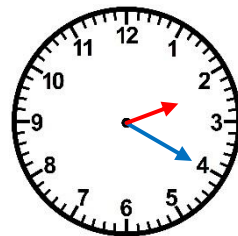
<https://laclassebleue.fr/>



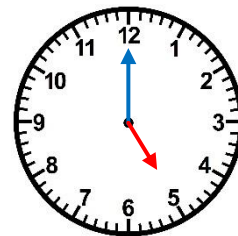
3 h 00



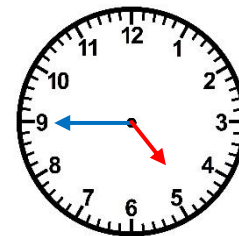
8 h 30



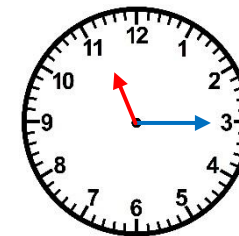
2 h 20



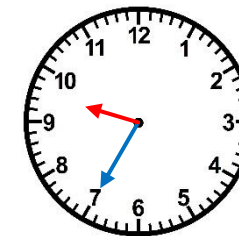
5 h 00



4 h 45




11 h 15



9 h 35

③ Résous ce problème.

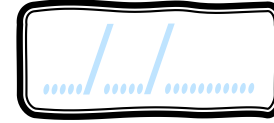
Marie a préparé une tarte aux pommes qu'elle a mise au four à 11h15. Le temps de cuisson est de 30 min. À quelle heure la tarte sera-t-elle cuite ?



Measures / Lire l'heure

Meures


CE2



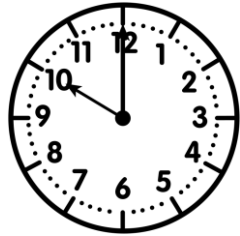
PRÉNOM :



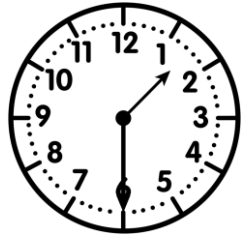
① Écris l'heure sous chaque horloge.



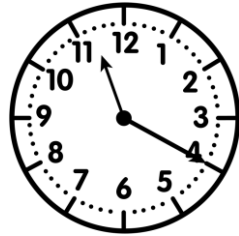
___ h ___




___ h ___




___ h ___



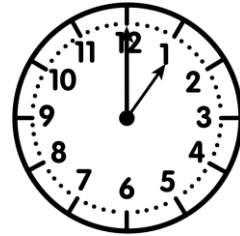
___ h ___



___ h ___



___ h ___

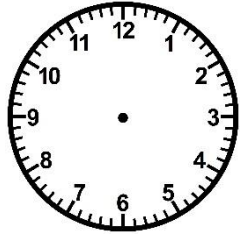


___ h ___

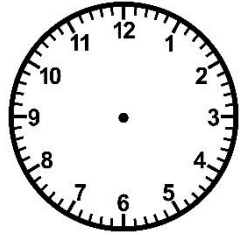


② Trace les aiguilles (rouge pour les heures, bleue pour les minutes).

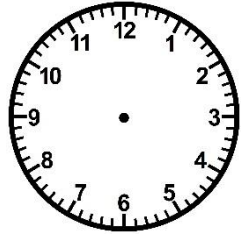
<https://laclassebleue.fr/>



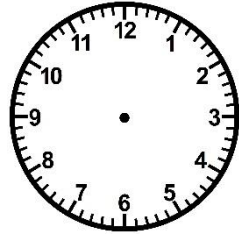
20 h 30



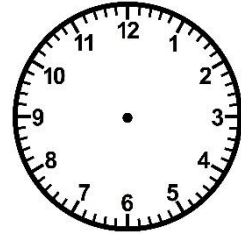
3 h 45



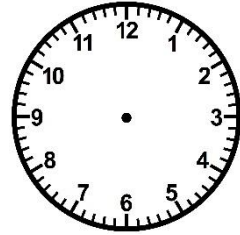
14 h 20



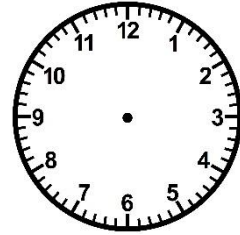
17 h 00



6 h 50



9 h 35



13 h 15

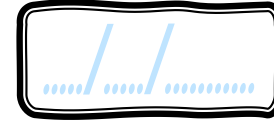
③ Résous ce problème.

La médiathèque du village ouvre ses portes à 10h30 et ferme à 17h00. Combien de
temps ouvre-t-elle dans la journée ?



Meures


CE2



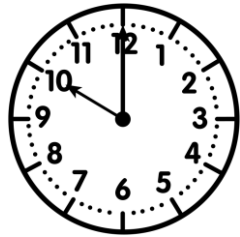
PRÉNOM :



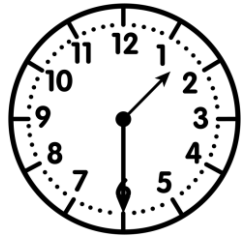
① Écris l'heure sous chaque horloge.



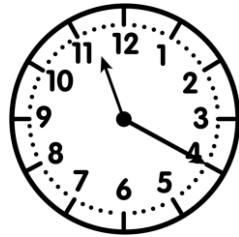
h	h
---	---




h	h
---	---




h	h
---	---



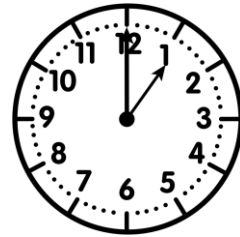
h	h
---	---



h	h
---	---



h	h
---	---

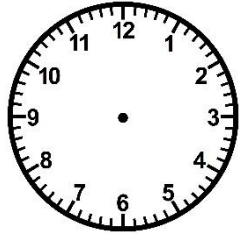


h	h
---	---

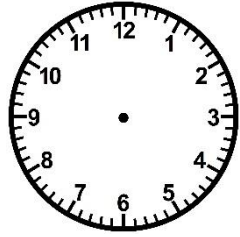


② Trace les aiguilles (rouge pour les heures, bleue pour les minutes).

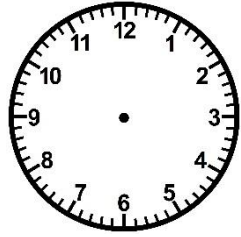
<https://laclassebleue.fr/>



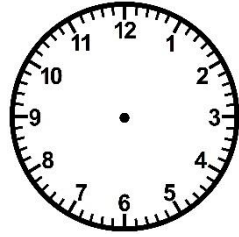
<u>20 h 30</u>



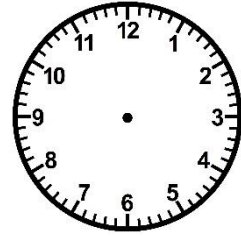
<u>3 h 45</u>



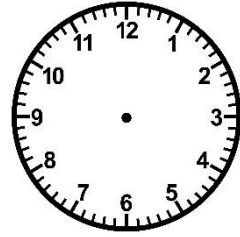
<u>14 h 20</u>



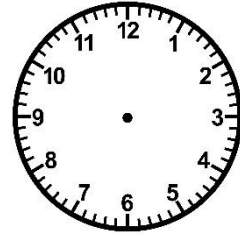
<u>17 h 00</u>



<u>6 h 50</u>



<u>9 h 35</u>



<u>13 h 15</u>

③ Résous ce problème.

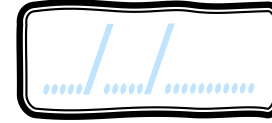
La médiathèque du village ouvre ses portes à 10h30 et ferme à 17h00. Combien de
temps ouvre-t-elle dans la journée ?



Meures/lire/l'heure

Meures

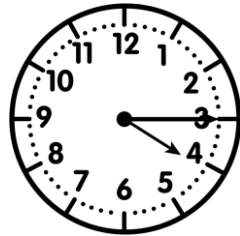
CE2



PRÉNOM :

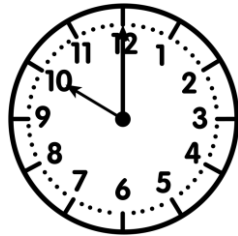


① Écris l'heure sous chaque horloge.



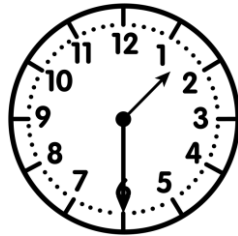
4h15

16h15



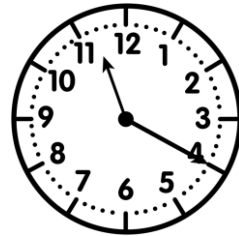
10h00

22h00




1h30

13h30




11h20

23h20




3h10

15h10



8h40

20h40



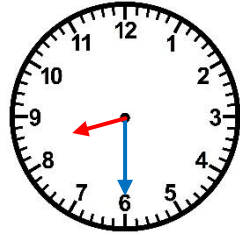
1h00

13h00

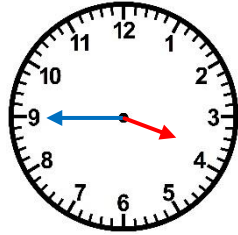


② Trace les aiguilles (rouge pour les heures, bleu pour les minutes).

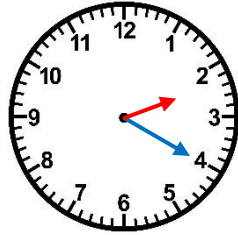
<https://laclassebleue.fr/>



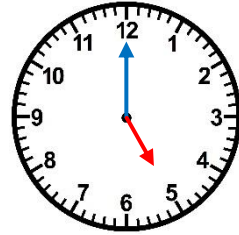
20 h 30



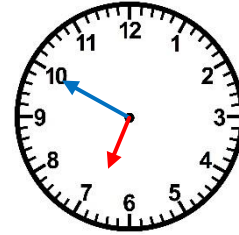
3 h 45



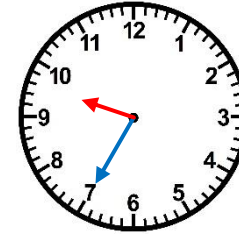
14 h 20



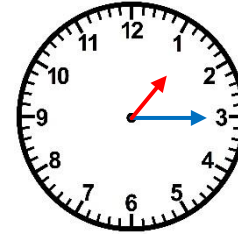
17 h 00



6 h 50




9 h 35



13 h 15

③ Résous ce problème.

La médiathèque du village ouvre ses portes à 10h30 et ferme à 17h00. Combien de temps ouvre-t-elle dans la journée ?



Meures/lire/l'heure

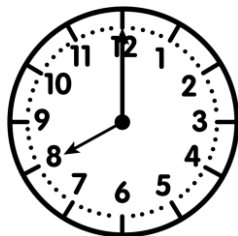
Measures

CE2

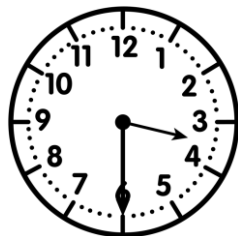
...../...../.....
PRÉNOM :




① Écris l'heure sous chaque horloge.



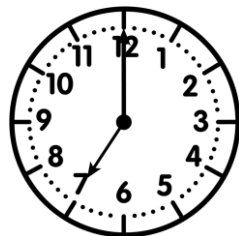
___ h ___



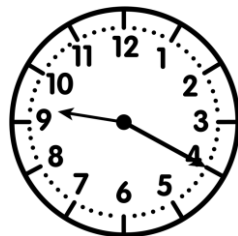
___ h ___



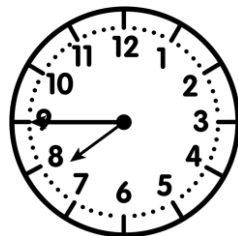
___ h ___




___ h ___



___ h ___



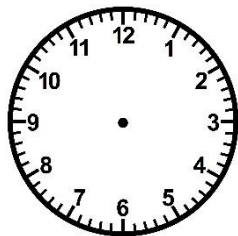

___ h ___



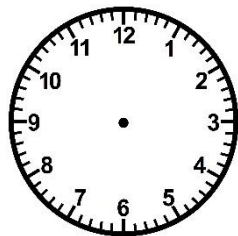
___ h ___

② Trace les aiguilles (rouge pour les heures, bleue pour les minutes).

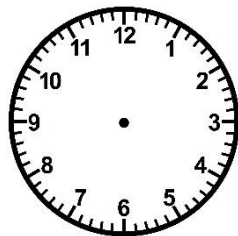
<https://laclassebleue.fr/>



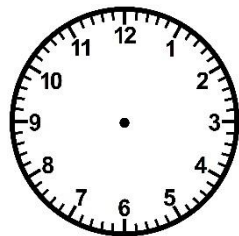
0 h 00



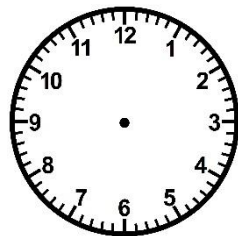
7 h 15



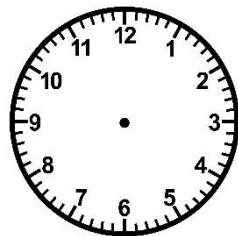
14 h 45



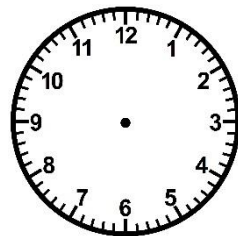
5 h 20



17 h 30




16 h 00



22 h 50

③ Résous ce problème.

Tomas et sa sœur ont pris le bus pour aller à l'école. Le trajet a duré 25 min et ils sont arrivés à 8h 15. À quelle heure sont-ils partis de chez eux ?



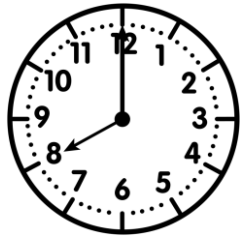
Meurea

CE2

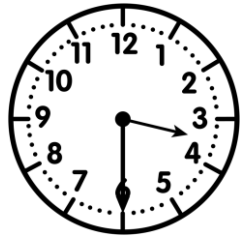
...../...../.....
PRÉNOM :




① Écris l'heure sous chaque horloge.



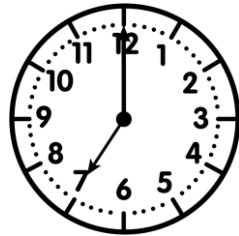
h h



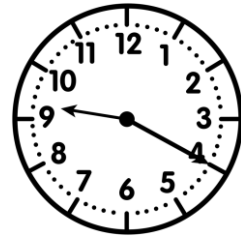
h h



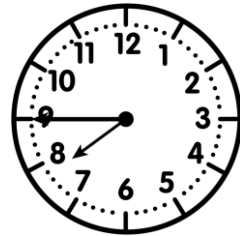
h h




h h



h h



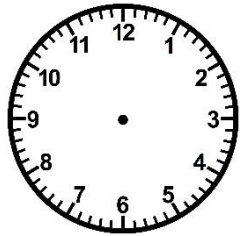

h h



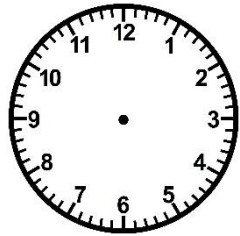
h h

② Trace les aiguilles (rouge pour les heures, bleue pour les minutes).

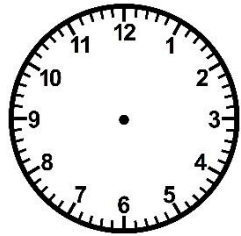
<https://laclassebleue.fr/>



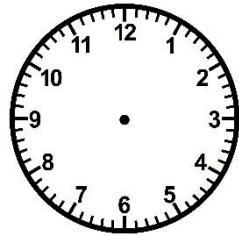
0 h 00



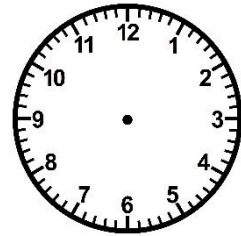
7 h 15



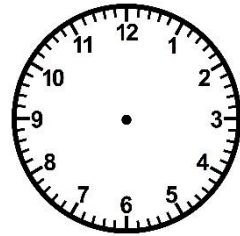
14 h 45



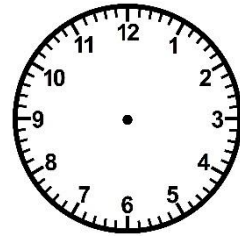
5 h 20



17 h 30




16 h 00



22 h 50

③ Résous ce problème.

Tomas et sa sœur ont pris le bus pour aller à l'école. Le trajet a duré 25 min et ils sont arrivés à 8h 15. À quelle heure sont-ils partis de chez eux ?



Meurea/lire l'heure

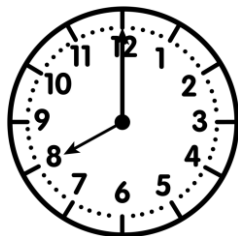
Meurea

CE2

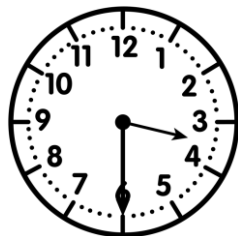
...../...../.....
PRÉNOM :




① Ecris l'heure sous chaque horloge.



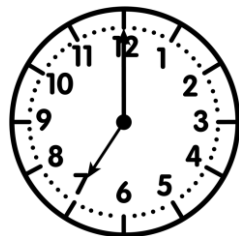
8h00 20h00



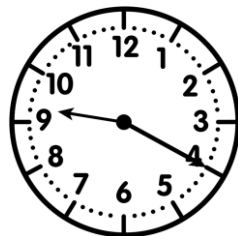
3h30 15h30



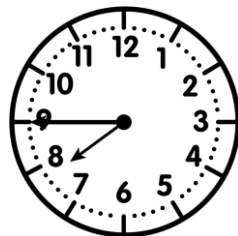
1h15 13h15




7h00 19h00



9h20 21h20



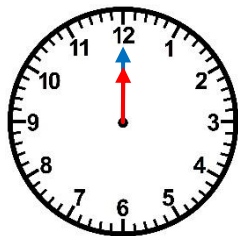

7h45 19h45



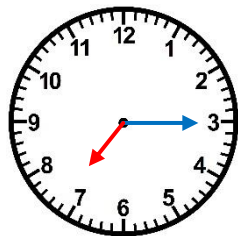
1h10 13h10

② Trace les aiguilles (rouge pour les heures, bleue pour les minutes).

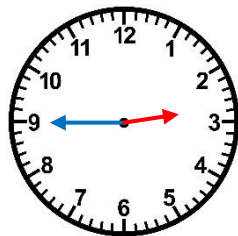
<https://laclassebleue.fr/>



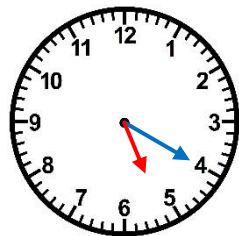
0 h 00



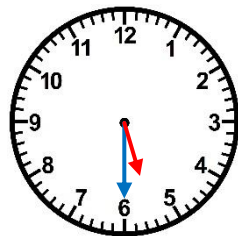
7 h 15



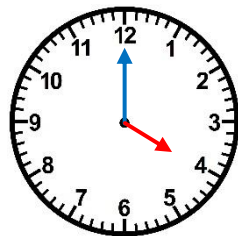
14 h 45



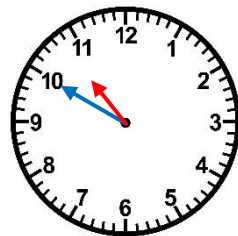
5 h 20



17 h 30



16 h 00



22 h 50

③ Résous ce problème.

Tomas et sa sœur ont pris le bus pour aller à l'école. Le trajet a duré 25 min et ils sont arrivés à 8h15. À quelle heure sont-ils partis de chez eux ?



Meurea/lire l'heure

Measures


CE2



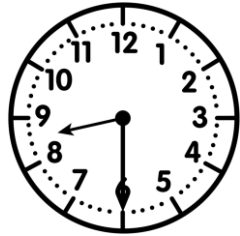
PRÉNOM:




① Écris l'heure sous chaque horloge.



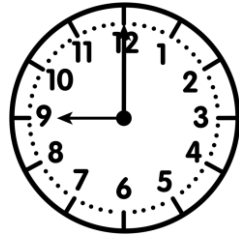
h




h



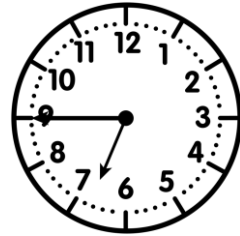
h



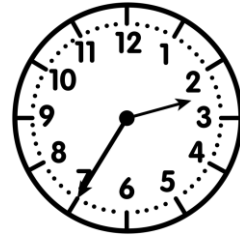
h



h



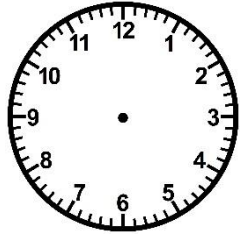

h



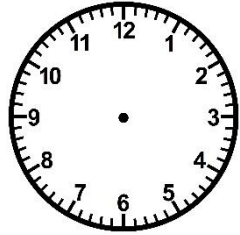
h

② Trace les aiguilles (rouge pour les heures, bleue pour les minutes).

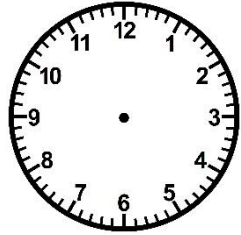
<https://laclassebleue.fr/>



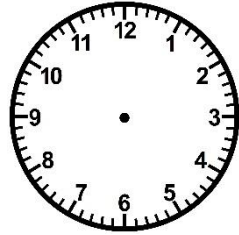
6 h 00



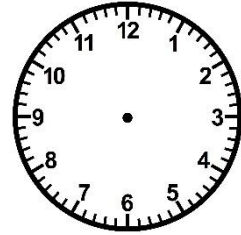
10 h 15



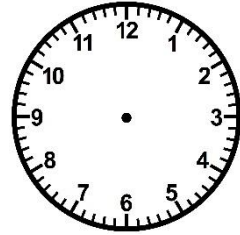
14 h 30



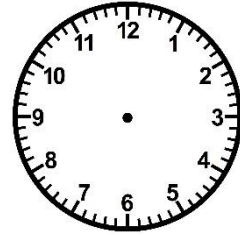
22 h 00



16 h 55



20 h 10



7 h 30

③ Résous ce problème.

Ce matin, Max et son père ont fabriqué une niche pour leur chien. Ils ont débuté à 9h30 et ont mis 3h30 pour la finir. À quelle heure ont-ils terminé ?



Measures / Lire l'heure

Measures


CE2




PRÉNOM:




① Écris l'heure sous chaque horloge.



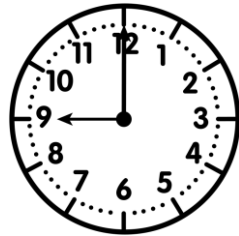
h	h
---	---




h	h
---	---



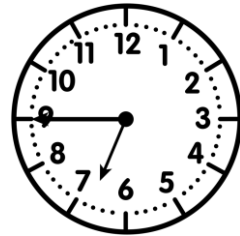
h	h
---	---



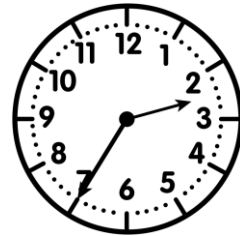
h	h
---	---



h	h
---	---



h	h
---	---

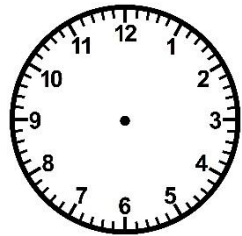



h	h
---	---

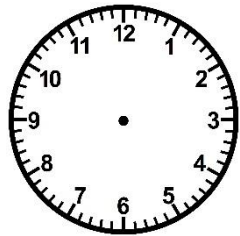


② Trace les aiguilles (rouge pour les heures, bleue pour les minutes).

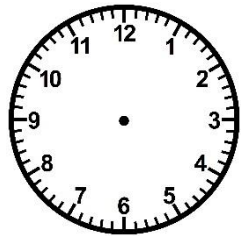
<https://laclassebleue.fr/>



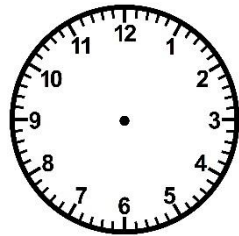
<u>6 h 00</u>



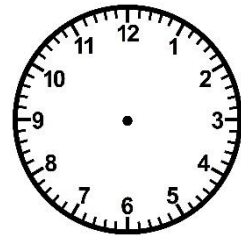
<u>10 h 15</u>



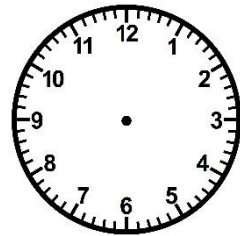
<u>14 h 30</u>



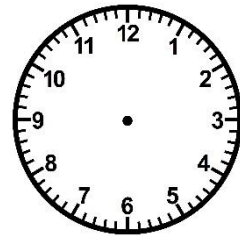
<u>22 h 00</u>



<u>16 h 55</u>



<u>20 h 10</u>



<u>7 h 30</u>

③ Résous ce problème.

Ce matin, Max et son père ont fabriqué une niche pour leur chien. Ils ont débuté à 9h30 et ont mis 3h30 pour la finir. À quelle heure ont-ils terminé ?



Measures / Lire l'heure

Measures

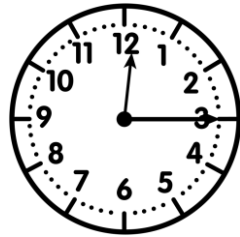
CE2



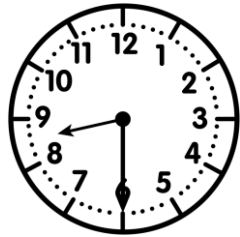
PRÉNOM:




① Ecris l'heure sous chaque horloge.



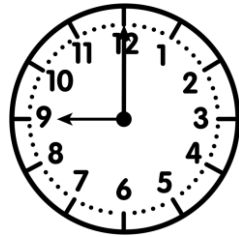
0h15 12h15




8h30 20h30



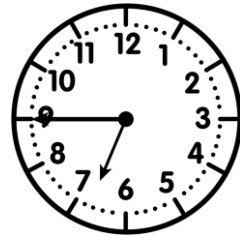
5h20 17h20




9h00 21h00



10h50 22h50



6h45 18h45

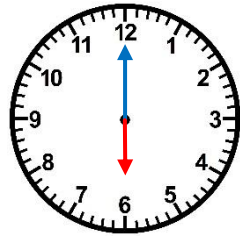


2h35 14h35

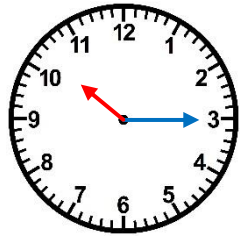


② Trace les aiguilles (rouge pour les heures, bleue pour les minutes).

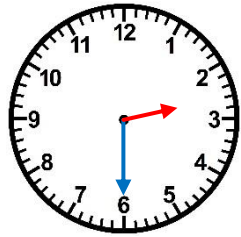
<https://laclassebleue.fr/>



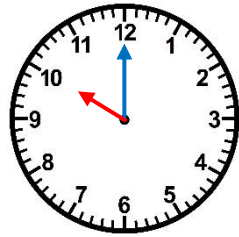
6 h 00



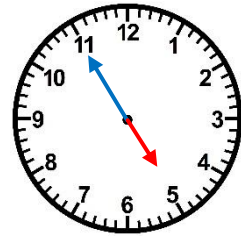
10 h 15



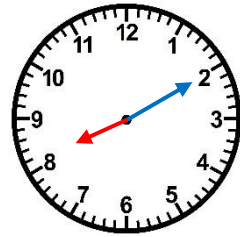
14 h 30



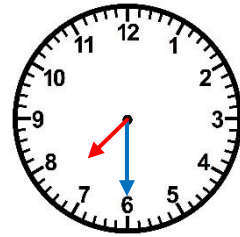
22 h 00




16 h 55



20 h 10



7 h 30



③ Résous ce problème.

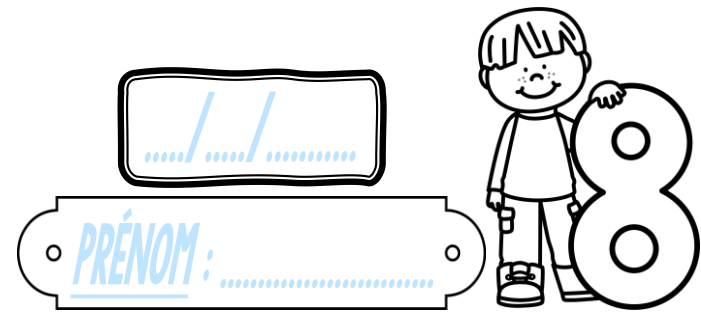
Ce matin, Max et son père ont fabriqué une niche pour leur chien. Ils ont débuté à 9h30 et ont mis 3h30 pour la finir. À quelle heure ont-ils terminé ?



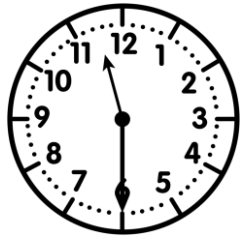
Measures / Lire l'heure

Meurea


CE2



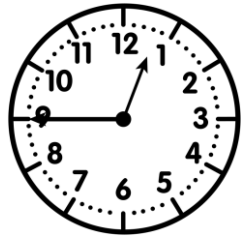
① Ecris l'heure sous chaque horloge.



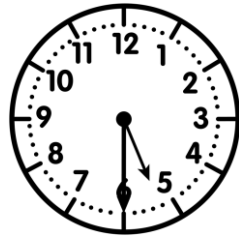
_____ h _____



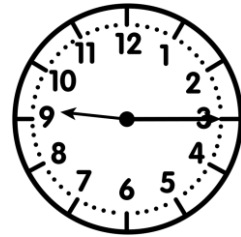
_____ h _____



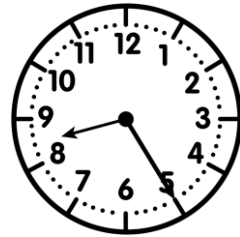
_____ h _____



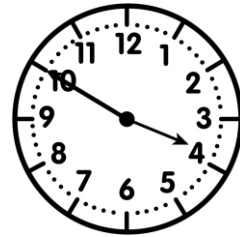
_____ h _____



_____ h _____



_____ h _____

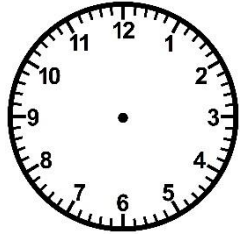



_____ h _____

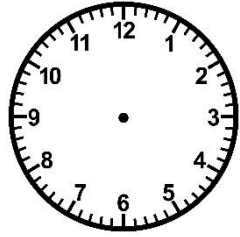


② Trace les aiguilles (rouge pour les heures, bleue pour les minutes).

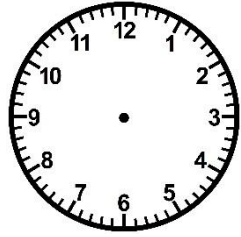
<https://laclassibleue.fr/>



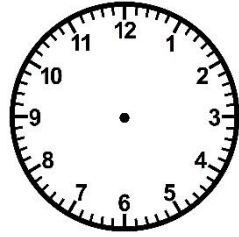
16 h 20



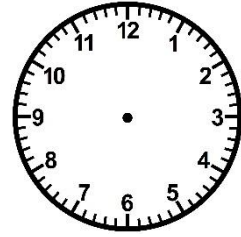
6 h 25



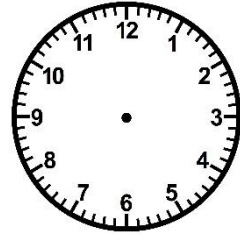
2 h 00



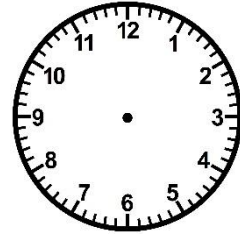
4 h 05



11 h 50



9 h 40



21 h 00

③ Résous ce problème.

Chaque samedi, la salle d'escalade ouvre de 10h à midi et de 13h30 à 17h00.

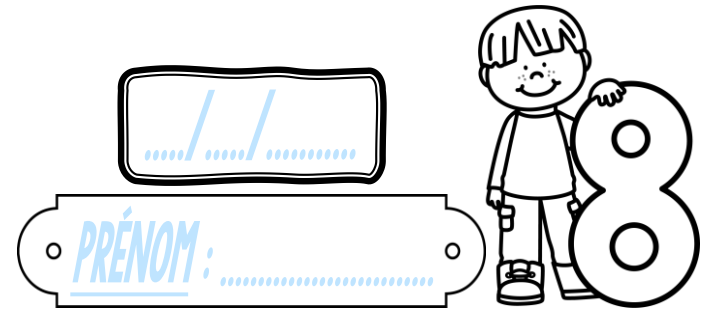
Combien de temps ouvre-t-elle dans la journée ?



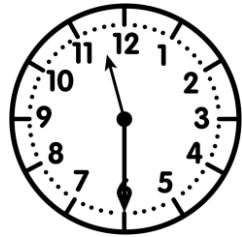
Meurea/lire l'heure

Meurea


CE2



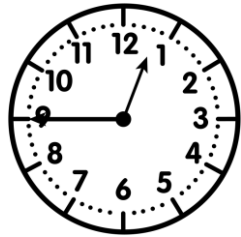
① Écris l'heure sous chaque horloge.



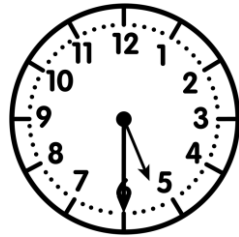
h h



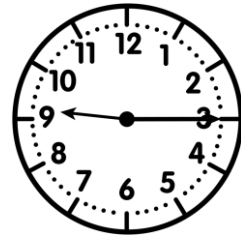
h h



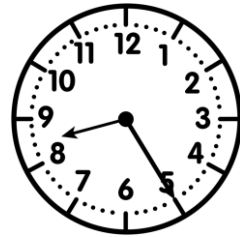
h h



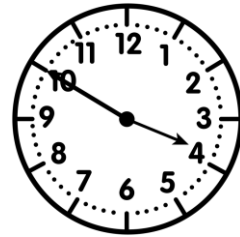
h h



h h



h h

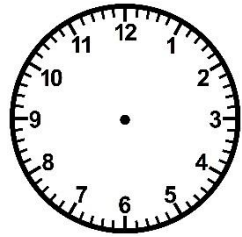



h h

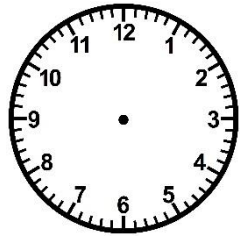


② Trace les aiguilles (rouge pour les heures, bleue pour les minutes).

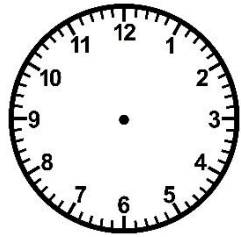
<https://laclassebleue.fr/>



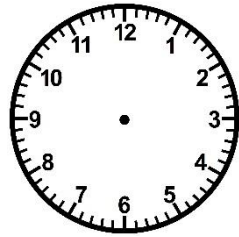
16 h 20



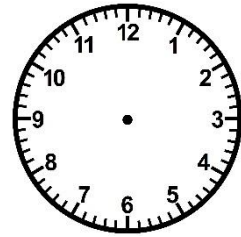
6 h 25



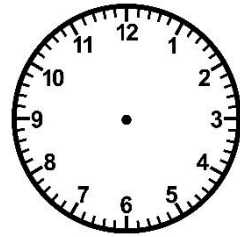
2 h 00



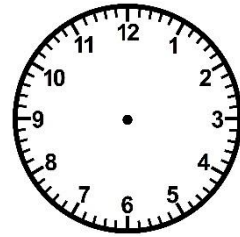
4 h 05



11 h 50



9 h 40



21 h 00

③ Résous ce problème.

Chaque samedi, la salle d'escalade ouvre de 10h à midi et de 13h30 à 17h00.

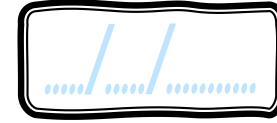
Combien de temps ouvre-t-elle dans la journée ?



Meurea/lire l'heure

Meurea

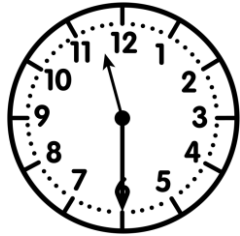
CE2




PRÉNOM:



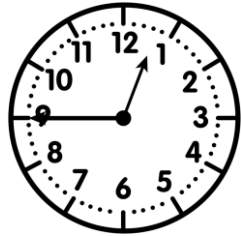
① Écris l'heure sous chaque horloge.



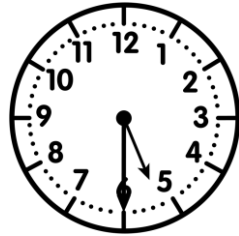
11h30



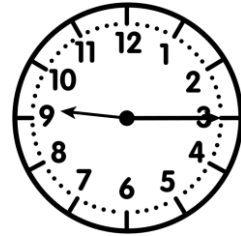
7h05



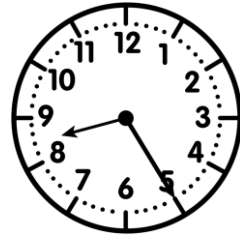
0h45



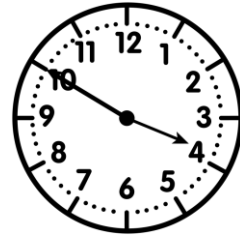
5h30



9h15



8h25



3h50

23h30

19h05

12h45

17h30

21h15

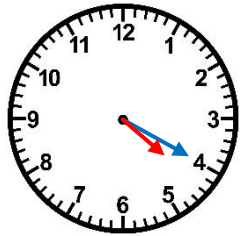
20h25

15h50

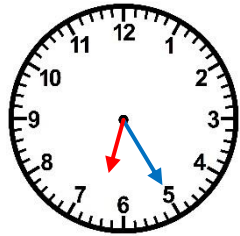


② Trace les aiguilles (rouge pour les heures, bleu pour les minutes).

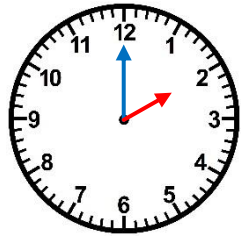
<https://laclassibleue.fr/>



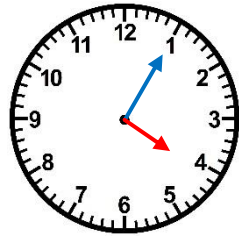
16 h 20



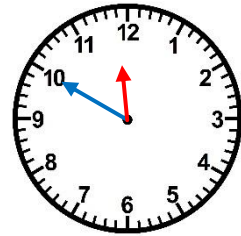
6 h 25



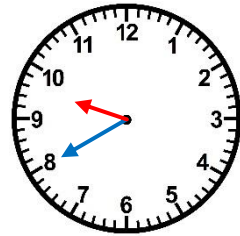
2 h 00



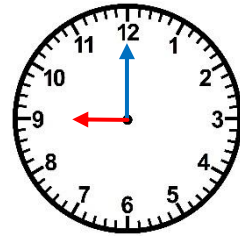
4 h 05



11 h 50



9 h 40



21 h 00

③ Résous ce problème.

Chaque samedi, la salle d'escalade ouvre de 10h à midi et de 13h30 à 17h00.

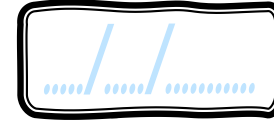
Combien de temps ouvre-t-elle dans la journée ?



Meurea/lire l'heure

Meurea

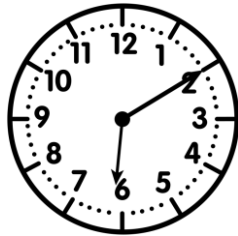

CE2




PRÉNOM :




① Ecris l'heure sous chaque horloge.




___ h ___



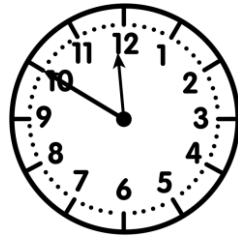
___ h ___




___ h ___




___ h ___



___ h ___



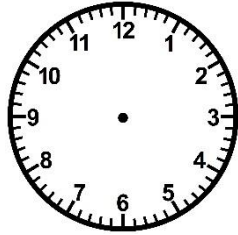
___ h ___



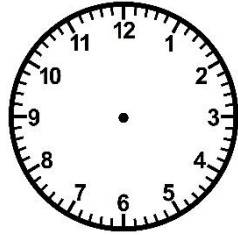
___ h ___

② Trace les aiguilles (rouge pour les heures, bleue pour les minutes).

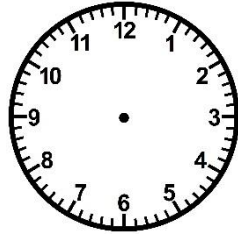
<https://laclassebleue.fr/>



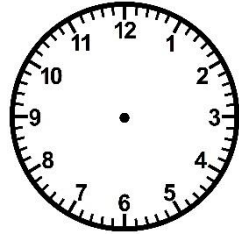
17 h 00



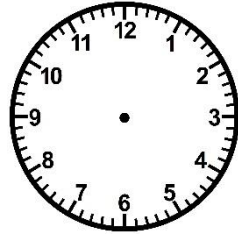
4 h 40



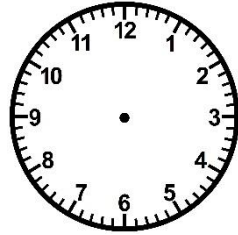
8 h 05



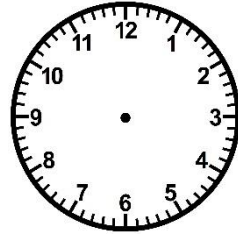
23 h 10



15 h 55



1 h 45



18 h 30

③ Résous ce problème.

La mère de Maël lui a fait couler un bain. Il est resté dans son bain 45 min et est sorti de la salle de bains à 19h30. À quelle heure Maël est-il entré dans son bain ?



Meurea/lire/l'heure

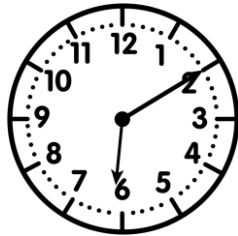

Meurea

CE2


...../...../.....
PRÉNOM :




① Ecris l'heure sous chaque horloge.




h h




h h




h h




h h



h h



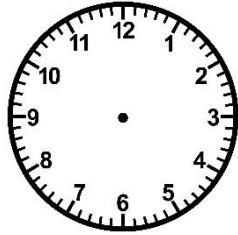
h h



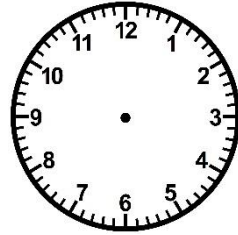
h h

② Trace les aiguilles (rouge pour les heures, bleue pour les minutes).

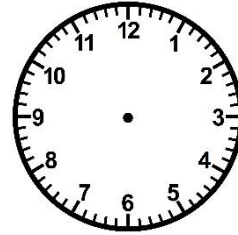
<https://laclassebleue.fr/>




17 h 00




4 h 40




8 h 05




23 h 10



15 h 55



1 h 45



18 h 30

③ Résous ce problème.

La mère de Maël lui a fait couler un bain. Il est resté dans son bain 45 min et est sorti de la salle de bains à 19h30. À quelle heure Maël est-il entré dans son bain ?



Meurea/lire/l'heure

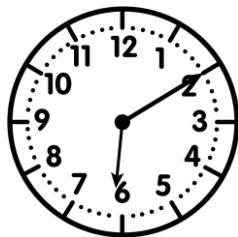

Measures

CE2

...../...../.....
PRÉNOM :




① Écris l'heure sous chaque horloge.




6h10

18h10




9h35

21h35




2h15

14h15




7h40

19h40




11h50

23h50



3h20

15h20

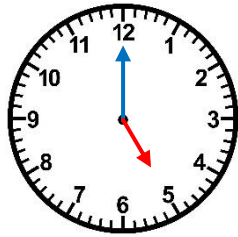


10h05

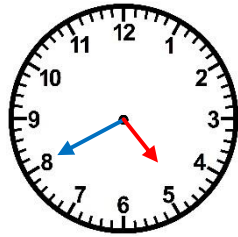
22h05

② Trace les aiguilles (rouge pour les heures, bleue pour les minutes).

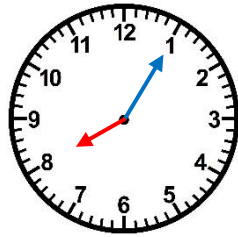
<https://laclassebleue.fr/>



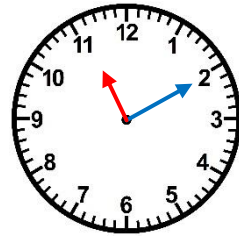
17 h 00



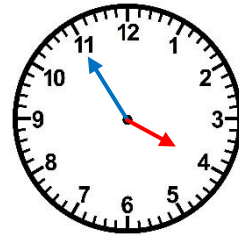
4 h 40



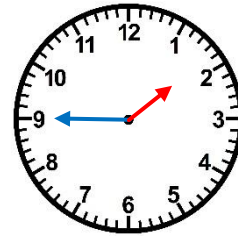
8 h 05



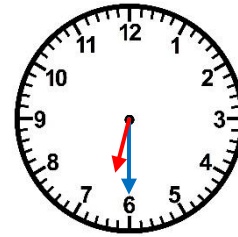
23 h 10



15 h 55



1 h 45



18 h 30

③ Résous ce problème.

La mère de Maël lui a fait couler un bain. Il est resté dans son bain 45 min et est sorti de la salle de bains à 19h30. À quelle heure Maël est-il entré dans son bain ?



Measures / lire l'heure